

6.1b Slope of a Line
Alg/Geo 3

Name: _____

Date: _____ Period: _____

Slope = _____

☺ Finding slope given the equation of a line: _____

1.) $y = \frac{3}{2}x + 2$

2.) $y = -2x$

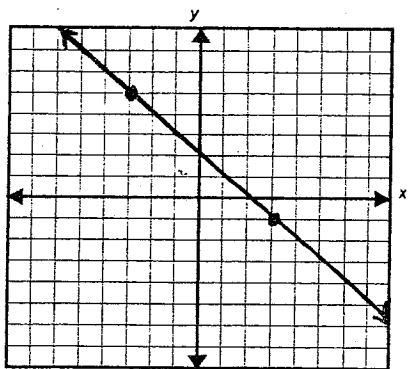
3.) $y = 6 - 4x$

slope = _____

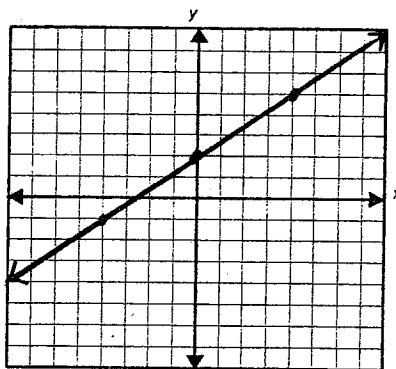
slope = _____

slope = _____

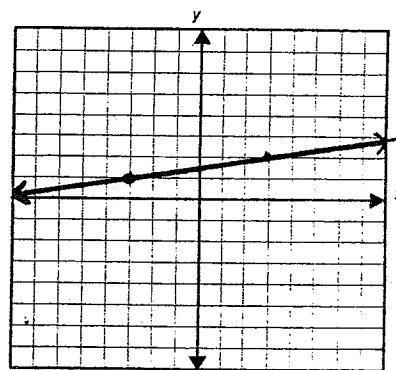
☺ Finding slope given a graph: _____



$m =$ _____



$m =$ _____



$m =$ _____

☺ Finding slope given two points: _____

1.) $(-2, 5)$ and $(3, -1)$

2.) $(-2, 5)$ and $(4, 3)$